



 Lesson 6

Which number is greater?

Let's learn about 'greater than, less than and the same'.



 **Warm up**

What numbers can you see?



 **Warm up**

Which sign can you use to compare these apples?





Warm up


Watch a video.





Focus on


Learn the words.





Focus on

Learn the words.



same

The number of birds and the number of worms are the **same**.



Focus on

Learn the words.



6 < 7



Focus on

Learn the words.



6 < 7

less than

6 is less than 7.





Focus on

Learn the words.


$$9 > 5$$



Focus on

Learn the words.


$$9 > 5$$

greater than

9 is greater than 5.



Focus on

Learn the words.

11 = 11



Focus on

Learn the words.


$$11 = 11$$

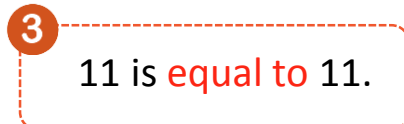
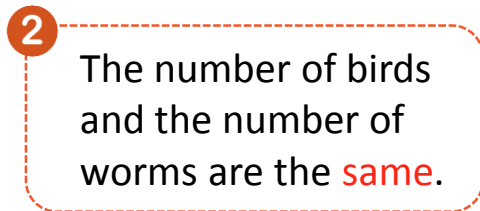
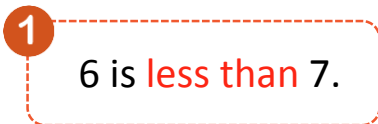
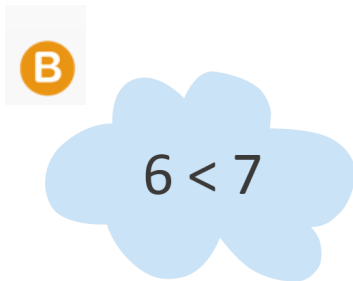
equal to

11 is equal to 11.



Focus on

Match the pictures with the sentences.





Get ready

Talk about the picture.





Get ready

Watch a video and answer the question.



What are they doing?



Get ready

(Mandy and Jimmy are playing the ring toss^①.)

Jimmy: The **rules** of the game are easy. We just take these rings and try **throwing** them onto that **pole**. The one who gets the most rings on the pole is the winner.

Mandy: OK! Let's **begin**!

(After the first round^②.)

Mandy: I **scored** 5 **points**^③ because I got 5 rings on the pole.

Jimmy: I got **the same** = number as you.

(After the second round.)

Mandy: I scored 5 points again.

Jimmy: I scored 7 points!

Mandy: The number of my rings is **less than** < yours.

Jimmy: Yes! 7 is **greater than** > 5, so I am the winner today!



① ringtoss: 套圈游戏

② round: 回合

③ point: 分数



Get ready

Answer the questions.

- A Who won the first round?
- B Who won the second round?





Get ready

Do a role-play.



The **rules** of the game are easy. We just take these rings and try **throwing** them onto that **pole**. The one who gets the most rings on the pole is the winner.

OK! Let's **begin**!





Get ready

Do a role-play.

(After the first round.)



I scored 5 points because I got 5 rings on the pole.

I got the same number as you.





Get ready

Do a role-play.

(After the second round.)



I scored 5 points again.

I scored 7 points!



The number of my rings is
less than yours.

Yes! 7 is **greater than** 5, so I am
The winner today!





Grammar

Practice.

Six=6

Six is **equal to** six.

6<10

Six is **less than** ten.

6>3

Six is **greater than** three.



Grammar

1. Match the phrases with the signs.

equal to



less than




greater than





Grammar


2. Use your hands to answer the questions.





Grammar



2. Use your hands to answer the questions.





Grammar

2. Use your hands to answer the questions.





Check here

1. Write $>$, $<$ or $=$ in the squares and read them.

1 37 45

2 10 8

3 87 44

4 32 56

5 55 57

6 100 100



Check here

2. Choose the correct answers.

1

Which number is less?

A. 7

B. 19





Check here

2. Choose the correct answers.

1

Which number is less?

A. 7

B. 19

2

Which number is greater?

A. 6

B. 16





Check here

2. Choose the correct answers.

3

Which words make this statement (表述) true? 13 ____ 13.

A. is greater than

B. is equal to



Have fun

Sort the numbers.





Have fun

Sort the numbers.



After Lesson Activity



Ask your father and mother to choose numbers from the wheel, then compare the numbers they choose.

 **Say goodbye**

